
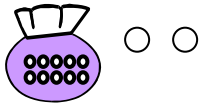


**חיבור עשרות עם עשרות, יחידות עם יחידות  
בכל שקית יש 10 עיגולים.**


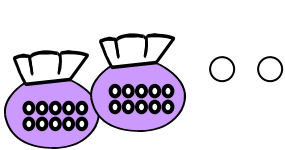
נפתור ביחד את התרגיל נתחיל בעשרות: מתוך 12 ניקח את 10.  
מתוך 11 ניקח את עשר ונחבר. 10 ועוד 10 שווים ל - 20.  
כעת יחידות: ניקח את 2 מתוך 12, ואת 1 מתוך 11, נחבר ביחד ל - 3.  
ולסיום 20 ועוד 3 שווים ל- 23.



$$12 + 11 = \underline{\hspace{2cm}}$$

$$\underline{10} + \underline{10} = \underline{20}$$

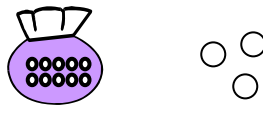
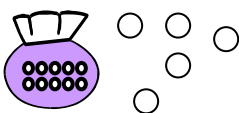
$$\underline{2} + \underline{1} = \underline{3}$$



$$22 + 22 = \underline{\hspace{2cm}}$$

$$\underline{20} + \underline{20} = \underline{\hspace{2cm}}$$

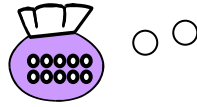
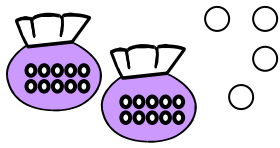
$$\underline{\hspace{2cm}} + \underline{\hspace{2cm}} = \underline{\hspace{2cm}}$$



$$15 + 13 = \underline{\hspace{2cm}}$$

$$\underline{\hspace{2cm}} + \underline{\hspace{2cm}} = \underline{\hspace{2cm}}$$

$$\underline{\hspace{2cm}} + \underline{\hspace{2cm}} = \underline{\hspace{2cm}}$$

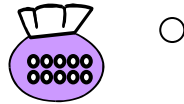
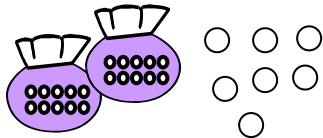


$$24 + 12 = \underline{\hspace{2cm}}$$

$$\underline{\hspace{2cm}} + \underline{\hspace{2cm}} = \underline{\hspace{2cm}}$$

$$\underline{\hspace{2cm}} + \underline{\hspace{2cm}} = \underline{\hspace{2cm}}$$

---

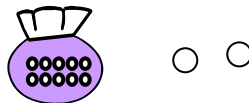
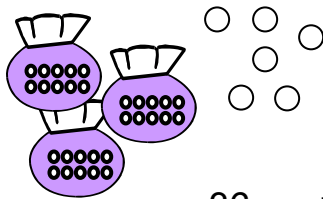


$$27 + 11 = \underline{\hspace{2cm}}$$

$$\underline{\hspace{2cm}} + \underline{\hspace{2cm}} = \underline{\hspace{2cm}}$$

$$\underline{\hspace{2cm}} + \underline{\hspace{2cm}} = \underline{\hspace{2cm}}$$

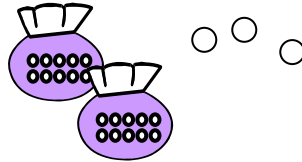

---



$$36 + 12 = \underline{\hspace{2cm}}$$

$$\underline{\hspace{2cm}} + \underline{\hspace{2cm}} = \underline{\hspace{2cm}}$$

$$\underline{\hspace{2cm}} + \underline{\hspace{2cm}} = \underline{\hspace{2cm}}$$

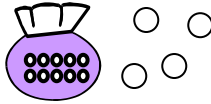
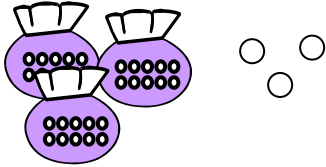


$$25 + 23 = \underline{\hspace{2cm}}$$

$$\underline{\hspace{2cm}} + \underline{\hspace{2cm}} = \underline{\hspace{2cm}}$$

$$\underline{\hspace{2cm}} + \underline{\hspace{2cm}} = \underline{\hspace{2cm}}$$

---

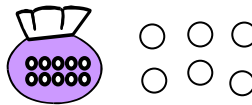
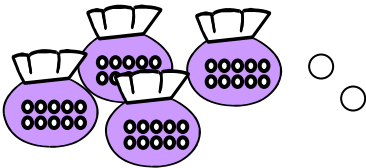


$$33 + 14 = \underline{\hspace{2cm}}$$

$$\underline{\hspace{2cm}} + \underline{\hspace{2cm}} = \underline{\hspace{2cm}}$$

$$\underline{\hspace{2cm}} + \underline{\hspace{2cm}} = \underline{\hspace{2cm}}$$

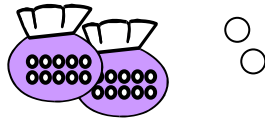
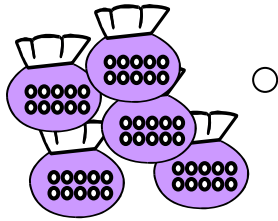
---



$$42 + 16 = \underline{\hspace{2cm}}$$

$$\underline{\hspace{2cm}} + \underline{\hspace{2cm}} = \underline{\hspace{2cm}}$$

$$\underline{\hspace{2cm}} + \underline{\hspace{2cm}} = \underline{\hspace{2cm}}$$

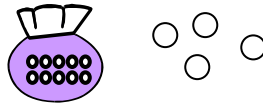
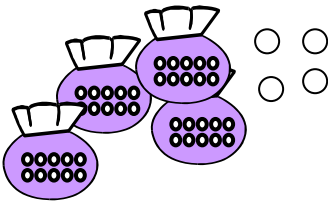


$$51 + 22 = \underline{\hspace{2cm}}$$

$$\underline{\hspace{2cm}} + \underline{\hspace{2cm}} = \underline{\hspace{2cm}}$$

$$\underline{\hspace{2cm}} + \underline{\hspace{2cm}} = \underline{\hspace{2cm}}$$

---

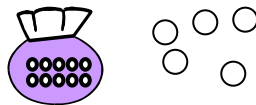
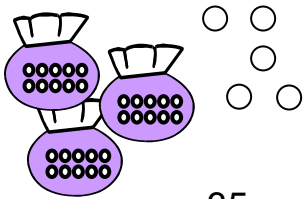


$$44 + 14 = \underline{\hspace{2cm}}$$

$$\underline{\hspace{2cm}} + \underline{\hspace{2cm}} = \underline{\hspace{2cm}}$$

$$\underline{\hspace{2cm}} + \underline{\hspace{2cm}} = \underline{\hspace{2cm}}$$

---



$$35 + 15 = \underline{\hspace{2cm}}$$

$$\underline{\hspace{2cm}} + \underline{\hspace{2cm}} = \underline{\hspace{2cm}}$$

$$\underline{\hspace{2cm}} + \underline{\hspace{2cm}} = \underline{\hspace{2cm}}$$

גזרו את הריבועים עם השקיות. תנו לילדכם להמציא לבד תרגילים, לייצג את התרגיל באמצעי המחשה של עשרות ויחידות ולפתור. (את היחידות מציירים בעיפרון).

